


Name _____ Date _____ Hour _____

Show your work on a separate sheet of paper.

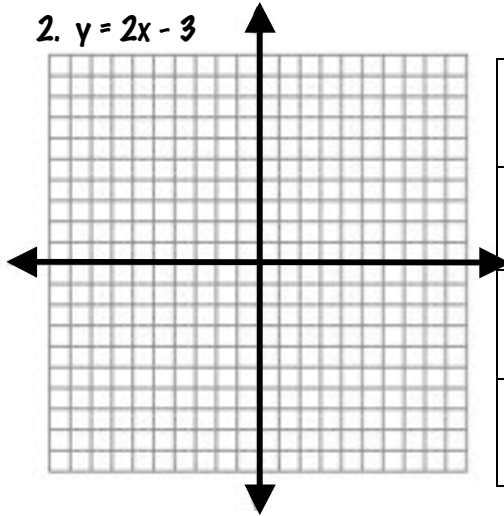
1. $y = x + 4$

x	y
-2	
0	
2	




2. $y = 2x - 3$

x	y
-2	
0	
2	



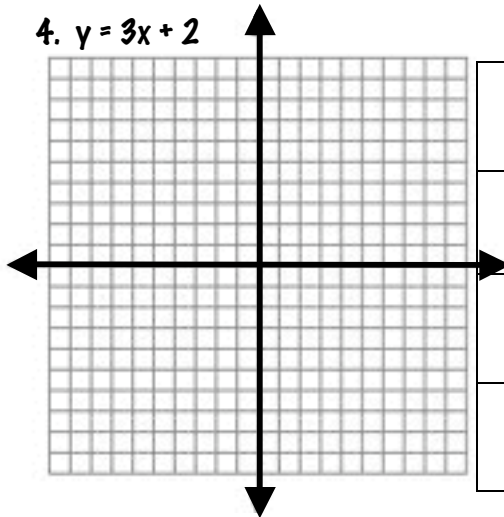
3. $y = x - 6$

x	y
-2	
0	
2	




4. $y = 3x + 2$

x	y
-2	
0	
2	



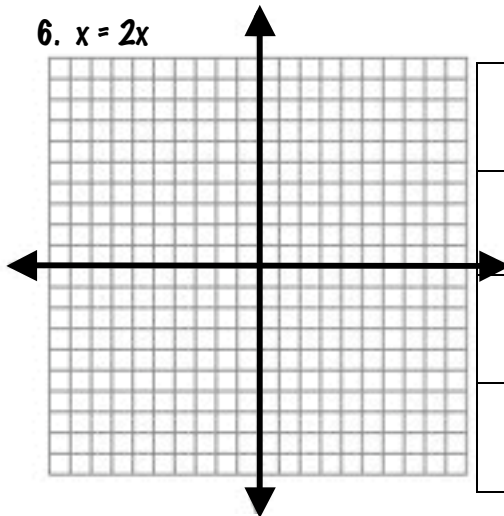
5. $y = 4x + 1$

x	y
-2	
0	
2	



6. $x = 2x$

x	y




Name _____ Date _____ Hour _____

Show your work on a separate sheet of paper.
Graph the following lines with a table.

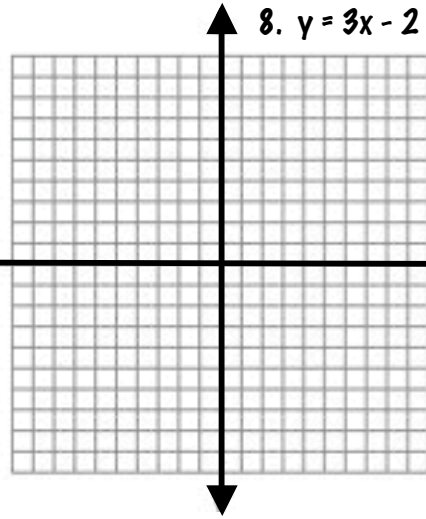
7. $y = -2x + 1$

x	y
-2	
0	
2	




8. $y = 3x - 2$

x	y
-2	
0	
2	



9. $y = -3x - 1$

x	y
-2	
0	
2	



10. $y = -4x$

x	y
-2	
0	
2	

